

International Prime School

Worksheet: 2 ;Class II

Sub: English language

1. Choose the right words:
 - a. Simon (is/as/has) four kittens.
 - b. Our neighbour (is/are) very friendly.
 - c. The (bee/bees) are buzzing.
 - d. (To/Too/Two) wolves are hunting a rabbit.
 - e. Would you like (to/too) drink tea?

2. Use the opposite of the given word in bracket to fill each space:
 - a. A.....story (long)
 - b. A.....street (quiet)
 - c. To.....a toy (break)
 - d. To.....a puppy (buy)
 - e. A.....seat (back)
 - f. A.....room (dark)
 - g. A.....fruit (sweet)
 - h. A.....tortoise (fast)
 - i. Very.....answer (long)
 - j. A.....child (glad)

3. Write the noise words of animals:
 - a. Dogs.....
 - b. Ducks.....
 - c. Sheep.....
 - d. Cow.....
 - e. Donkeys.....
 - f. Cockerels.....
 - g. Hens.....
 - h. Cat.....

Class: II

Sub: English Literature

Chap: 12- David Livingstone

1. W/M

- a. Kind
- b. Wage
- c. Pleased
- d. Bible
- e. Eagerly
- f. Grumble
- g. Spare moment

2. Q/A

- a. Where did David Livingstone live?
- b. What was his first work?
- c. When he grew up, what did he decide to do?
- d. What did David Livingstone love the most?
- e. What did he buy by his first wage?

3. F/B

- a. David Livingstone was born in a town near
- b. His father was a
- c. David's first wages was
- d. Of all his books, he loved his The most.
- e. When he grew up he left his country and went to

International prime school

Class: I I

Worksheet:2

1 . Word problems :

- a. 4 student's can sit at a desk . How many desks are needed for 64 children?
- b. Divide the largest three digit number by 9 .
- c. How many weeks do 84 days make?
- d. Add 68 and 79 and multiply the sum by 24
- e. There are 236 pages in a book . How many pages are there in 58 books?
- f. There are 5890 books in English and 3875 books in science in a school library.
How many books are there altogether ?

2 write the numbers in words

- a. 9999=
- b. 8761=
- c. 4444=
- d. 7067=
- e. 2008=
- f. 2455=
- g. 1489=
- h. 9090=
- i. 4321=
- j. 2368=







INTERNATIONAL PRIME SCHOOL

Class: II, Sub: ICT

Worksheet: 02

1. Match the columns.

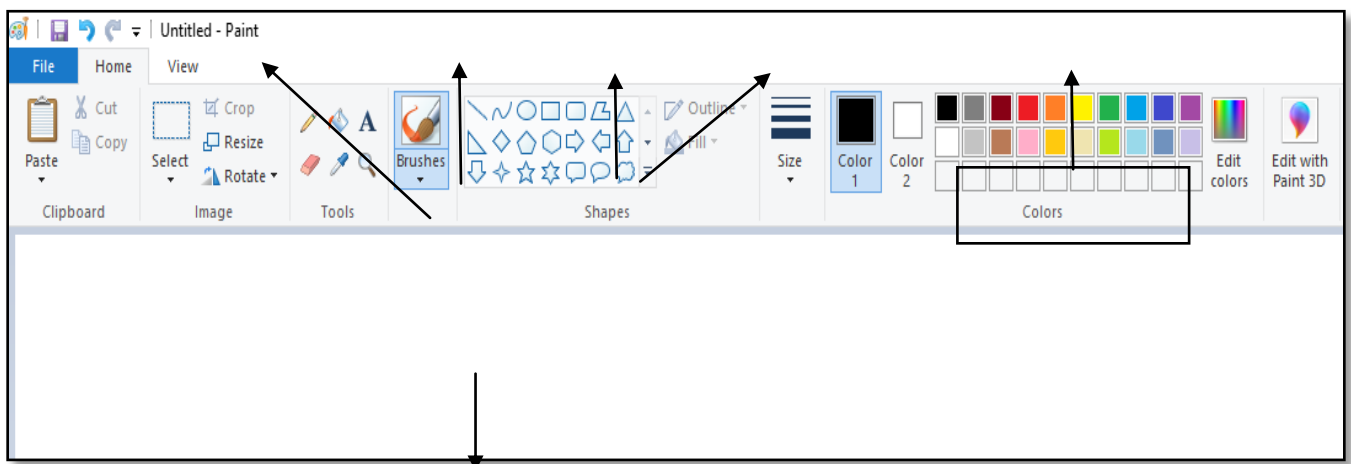
- A. Eraser tool
- B. Brushes tool
- C. Oval tool
- D. Pencil tool
- E. Fill with color
- F. Rectangle tool

- i. 
- ii. 
- iii. 
- iv. 
- v. 
- vi. 

2. Fill in the blanks.

- (a) The white portion on the Paint screen is called the _____ area.
- (b) The _____ tool is used to erase drawings.
- (c) In Paint, the _____ tool draws a thinner line than the Brushes tool.
- (d) In paint, the Rectangle tool is found in the _____ group.
- (e) The _____ tool and _____ toll help to draw.

3. Label the parts of the Paint window shown below.



International Prime School

Work sheet- 2

Class-II

Subject: Science

1.

- a) _____ comes from factories, chimneys and fires.
- b) When a sick man coughs, _____ get into the air.
- c) Some gases are _____, they can harm you.
- d) When water boils it turns into _____.
- e) Trees may be uprooted during a _____.
- f) The Earth is like a ball, we call this shape _____.
- g) The sun rises in the _____ and sets in the _____.
- h) The Earth spins around the Sun once every _____.
- i) The path the Earth takes round the sun is called an _____.

2. Draw the diagram of 'water cycle' and label it.